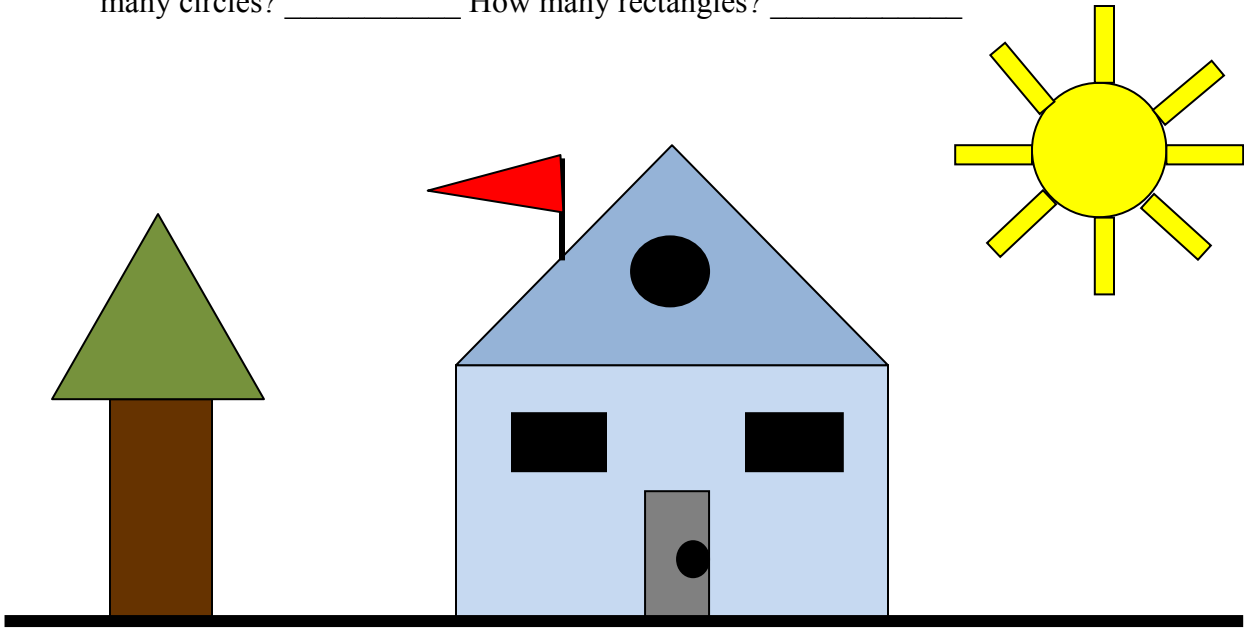


Smiley Face Math  
Worksheet VII

Name: \_\_\_\_\_

☺☺☺☺ 1. Tommy drew this picture. How many triangles did he use? \_\_\_\_\_ How many circles? \_\_\_\_\_ How many rectangles? \_\_\_\_\_




☺☺ 2. Circle the pictures that show a sphere. Tell how you know they are spheres.

Answer: They are spheres because \_\_\_\_\_

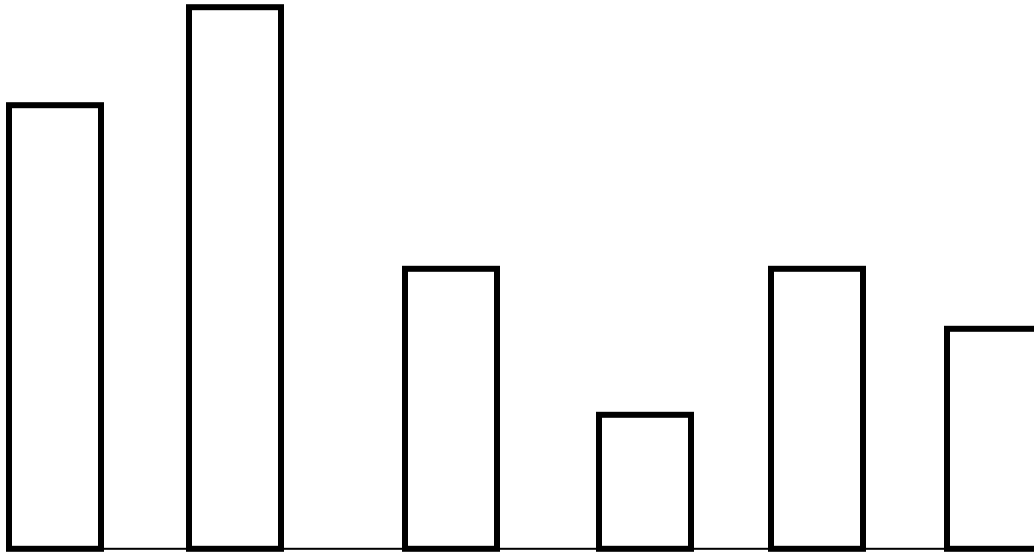


☺☺☺ 3. Start on the left and say the shape names in order. Then draw the next 6 shapes in this growing pattern.





4. Color the *tallest* rectangle blue. Color the *shortest* rectangle orange. Color the two rectangles that are *the same size* green.



5. Use the pictures below to answer the questions.

What shape is the outside edge of each picture in the top row? \_\_\_\_\_

What shape is the outside edge of each picture in the middle row? \_\_\_\_\_

What shape is the outside edge of each picture in the bottom row? \_\_\_\_\_

